
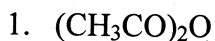


Chapter 20: Functional Derivatives of Carboxylic Acids Worksheet

NOMENCLATURE:


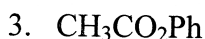
Please name the following structures:



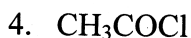
Acetic Anhydride or
Ethanoic Anhydride



Benzamide

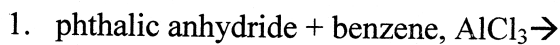


Phenyl Acetate or
Phenyl Ethanoate
(Methyl Benzoate)



Acetyl chloride or
Ethanoyl chloride

REACTIONS:



Friedel-Craft

