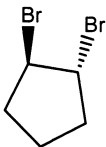


Chapter 13: "Alicyclics" Worksheet

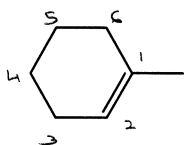
1. Name the following compounds:



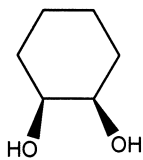
cyclopentene



trans-1,2-dibromocyclopentane



implied
① methylcyclohexene
(methylcyclohexene)



cis-1,2-dihydroxycyclohexane
OR
cis-1,2-cyclohexanediol